
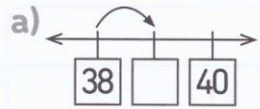


14. L'addition et la soustraction jusqu'à 100


Activité 1

Séance 109 - Addition des unités

1 Complète puis additionne.



$38 + 1 = \square$



$26 + 2 = \square$

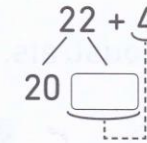
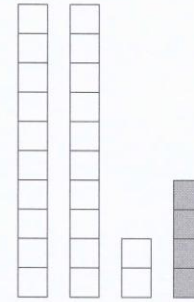


$76 + 3 = \square$

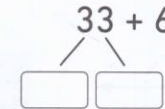
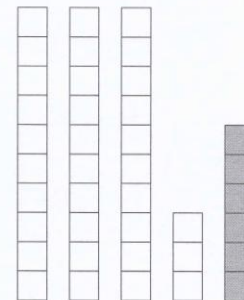
d) $88 + 2 = \square$

2 Additionne et complète.

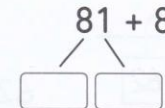
a) $22 + 4 = \square$



b) $33 + 6 = \square$



c) $81 + 8 = \square$



d) $54 + 4 = \square$